

Homework/Extension

Step 1: Find a Rule – One Step

National Curriculum Objectives:

Mathematics Year 6: (6A1) [Express missing number problems algebraically](#)

Mathematics Year 6: (6A2) [Use simple formulae](#)

Differentiation:

Questions 1, 4 and 7 (Varied Fluency)

Developing Circle the correct function to complete the function machines. Use of whole numbers.

Expected Circle the correct function to complete the function machines. Use of all four operations where an input or output may be a decimal number, or a negative number.

Greater Depth Circle the correct function to complete the function machines. Use of all four operations where an input or output may be a decimal number, a fraction, or a negative number. Functions may also include decimal numbers.

Questions 2, 5 and 8 (Varied Fluency)

Developing Find the missing functions in the function machines. Use of whole numbers.

Expected Find the missing functions in the function machines. Use of all four operations where an input or output may be a decimal number, or a negative number.

Greater Depth Find the missing functions in the function machines. Use of all four operations where an input or output may be a decimal number, a fraction, or a negative number. Functions may also include decimal numbers.

Questions 3, 6 and 9 (Application and Reasoning)

Developing Decide who is correct and explain why. Use of whole numbers.

Expected Decide who is correct and explain why. Use of all four operations where an input or output may be a decimal number, or a negative number.

Greater Depth Decide who is correct and explain why. Use of all four operations where an input or output may be a decimal number, a fraction, or a negative number. Functions may also include decimal numbers.

More [Year 6 Algebra](#) resources.

Did you like this resource? Don't forget to [review](#) it on our website.

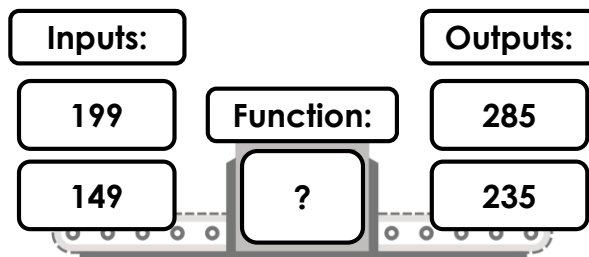
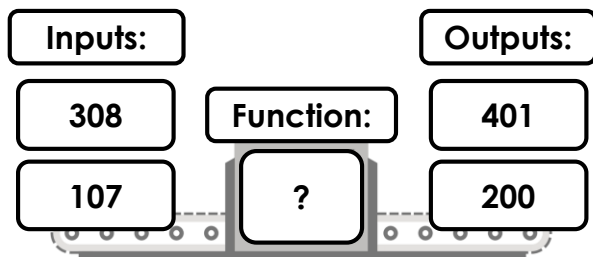
Find a Rule – One Step

1. Circle the correct function that will allow the inputs to be converted to the outputs below.

– 127

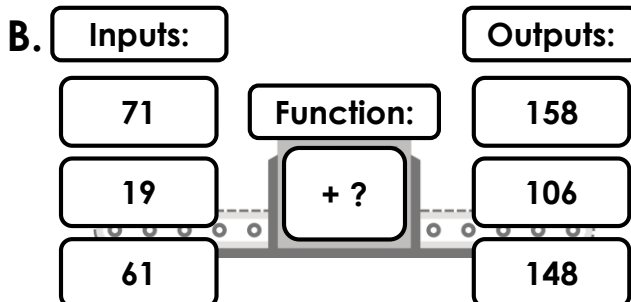
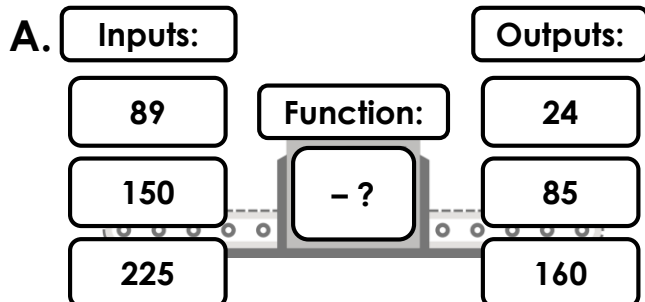
+ 86

+ 93



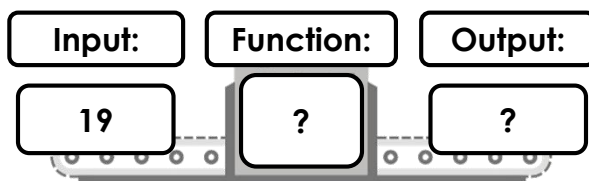
VF
HW/Ext

2. Find the missing functions in the function machines below.



VF
HW/Ext

3. Bonnie and Tyler are discussing which function should be used in the function machine below. They want to create the biggest number possible.



Bonnie

I think the function 'multiply 3' should be used.



Tyler

I think the function 'add 37' should be used.

Who do you agree with? Explain why.



RPS
HW/Ext

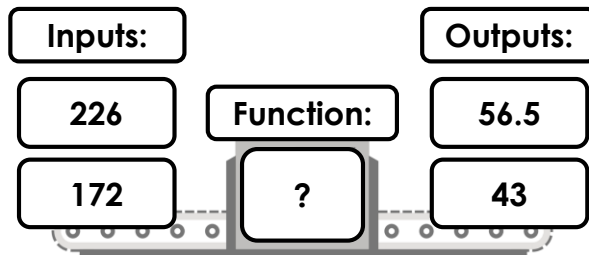
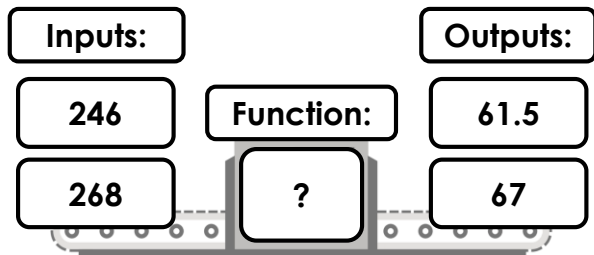
Find a Rule – One Step

4. Circle the correct function that will allow the inputs to be converted to the outputs below.

$- 108$

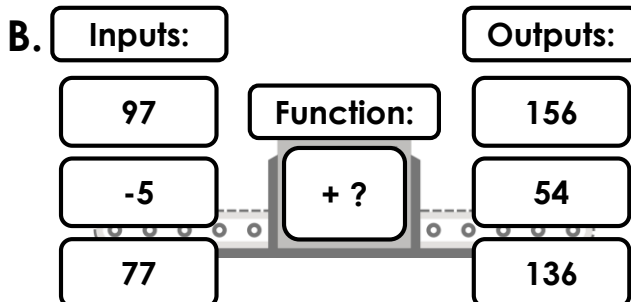
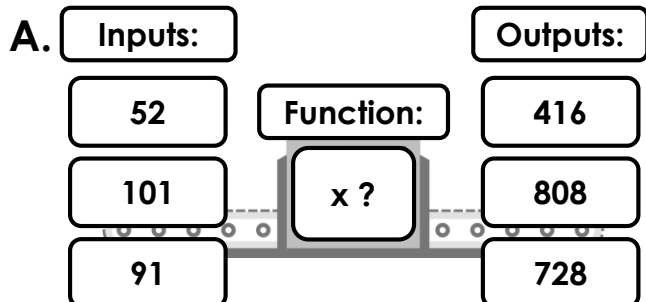
$\div 4$

$\div 6$



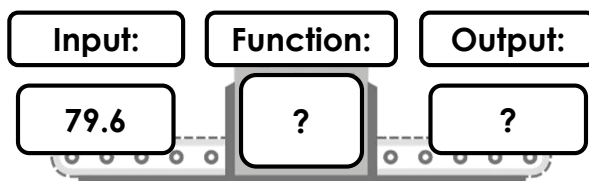
VF
HW/Ext

5. Find the missing functions in the function machines below.



VF
HW/Ext

6. Billie and Joel are discussing which function should be used in the function machine below. They want to create the smallest number possible.



Billie

I think the function 'subtract 39.7' should be used.



Joel

I think the function 'divide by 2' should be used.

Who do you agree with? Explain why.



RPS
HW/Ext

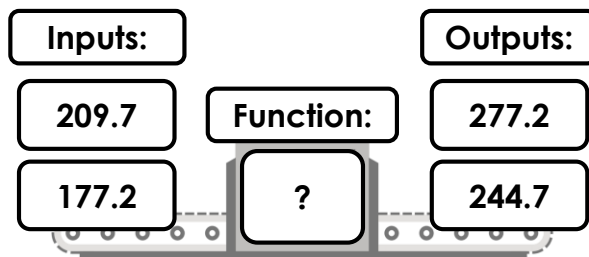
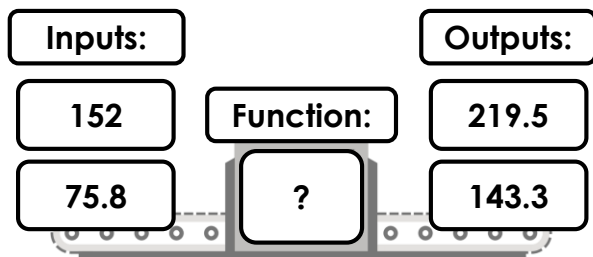
Find a Rule – One Step

7. Circle the correct function that will allow the inputs to be converted to the outputs below.

+ 65.5

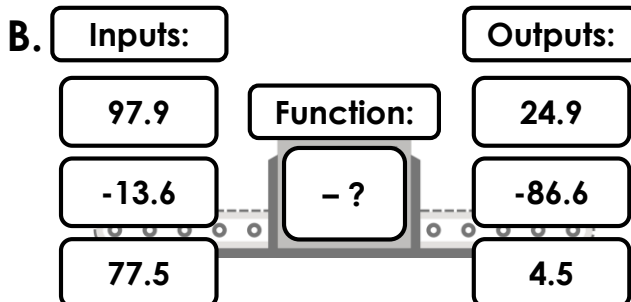
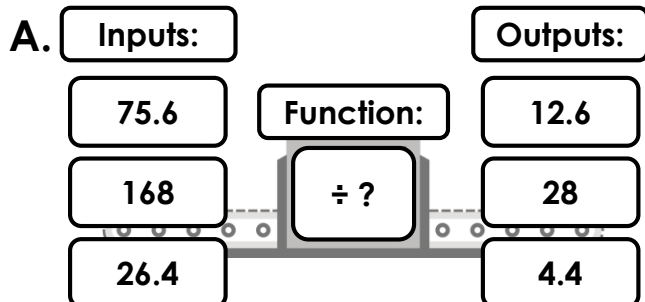
x 2

+ 67.5



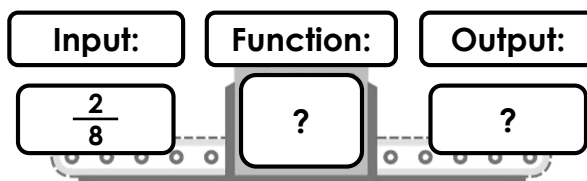
VF
HW/Ext

8. Find the missing functions in the function machines below.



VF
HW/Ext

9. Bob and Dylan are discussing which function should be used in the function machine below. They want to create the smallest number possible.



Bob

I think the function 'subtract 0.31' should be used.



Dylan

I think the function 'divide by 5' should be used.

Who do you agree with? Explain why.



RPS
HW/Ext

Homework/Extension

Find a Rule – One Step

Developing

1. + 93
2. A. – 65; B. + 87
3. Various answers, for example:
Bonnie is correct. This is because $19 \times 3 = 57$, whereas $19 + 37 = 56$, and 57 is bigger than 56.

Expected

4. $\div 4$
5. A. $\times 8$; B. + 59
6. Various answers, for example:
Joel is correct. This is because $79.6 \div 2 = 39.8$, whereas $79.6 - 39.7 = 39.9$, and 39.8 is smaller than 39.9.

Greater Depth

7. + 67.5
8. A. $\div 6$; B. – 73
9. Various answers, for example:
Bob is correct. This is because $\frac{2}{8}$ is equal to 0.25 as a decimal, so $0.25 - 0.31 = -0.06$, whereas $0.25 \div 5 = 0.05$, and -0.06 is smaller than 0.05.