
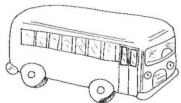




Addition problems

Name.....
Please remember to write the sum and the answer.

1. In a rugby match team A scored 9 points and team B scored 10 points. How many points were scored in total?
2. A baker has 10 tarts for sale. He then bakes 8 more. How many tarts has he now got for sale?
3. In Cotford School the Year 2 class has 20 children In Salton school the Year 2 class has 12 children. How many children are there in Year 2 altogether? 
4. There are 10 people on a bus. At the next stop 11 more people get on. How many people are now on the bus?
5. Along a road there are 20 street lamps. The council think it's still too dark and add an extra 6. How many street lamps are there now?
6. On Thursday Imran the builder laid 14 bricks. On Friday he laid 6 bricks. Which day did he lay the most bricks? How many did he lay altogether? 
7. There are 13 flats in block A and 7 flats in block B. Which block has the most flats? How many flats are there altogether? 
8. At a party there were 12 bottles of pop. The children drank them all and another 8 bottles. How many bottles were drunk altogether? 
9. Gaby scores 17 points in the computer game and Lisa only scores 3. Who had the most points? How many points did they score altogether?
10. Molly's favourite book has 20 pages. Tia's favourite book has 10 pages more. How many pages does Tia's favourite book have? 